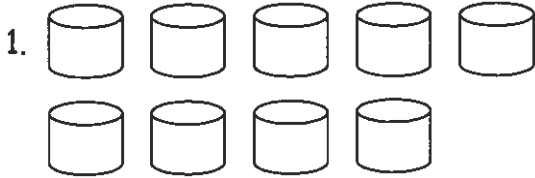


Name _____

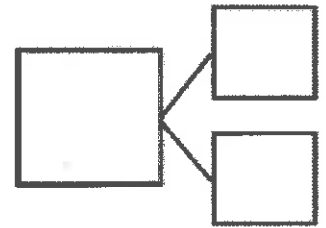
Date _____

How many objects do you see? Draw one more. How many objects are there now?



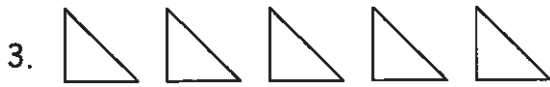
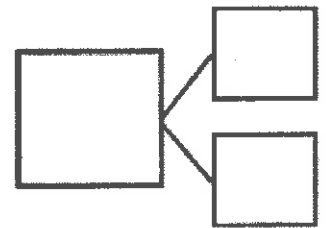
1 more than 9 is _____.

$9 + 1 = \underline{\quad}$



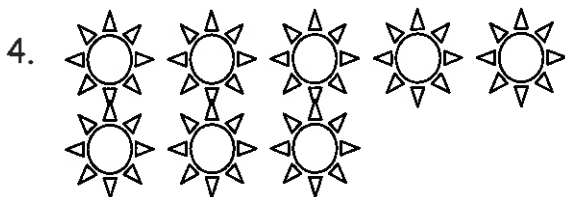
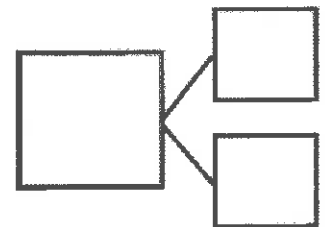
_____ is 1 more than 7.

_____ = $7 + 1$



_____ is 1 more than 5.

_____ = $5 + 1$



1 more than 8 is _____.

_____ + 1 = _____

