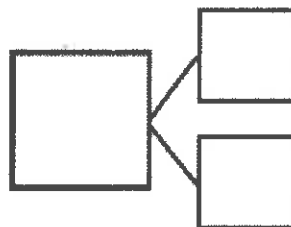


5. Imagine adding 1 more pencil to the picture.
Then, write the numbers to match how many pencils there will be.





1 more than 5 is _____.

$5 + 1 =$ _____



6. Imagine adding 1 more flower to the picture.
Then, write the numbers to match how many flowers there will be.



_____ is 1 more than 8.

_____ + 1 = _____

